




## Telling The Time


---

Look at the time and draw the clock hands on the clocks below.  
Then write the time in the blank space.




3:05

\_\_\_\_\_




2:10

\_\_\_\_\_




4:15

\_\_\_\_\_




8:20

\_\_\_\_\_




5:25

\_\_\_\_\_




1:30

\_\_\_\_\_




12:35

\_\_\_\_\_




7:40

\_\_\_\_\_




6:45

\_\_\_\_\_




11:50

\_\_\_\_\_



10:55

\_\_\_\_\_



9:00

\_\_\_\_\_