


NAME:

DATE:


# WHAT TIME IS IT?

Look at the time and draw the clock hands on the clocks below. Then write the time in the blank space.




3:05

\_\_\_\_\_




2:10

\_\_\_\_\_




4:15

\_\_\_\_\_




8:20

\_\_\_\_\_




5:25

\_\_\_\_\_




1:30

\_\_\_\_\_




12:35

\_\_\_\_\_




7:40

\_\_\_\_\_




6:45

\_\_\_\_\_




11:50

\_\_\_\_\_



10:55

\_\_\_\_\_



9:00

\_\_\_\_\_